

1

Learning Activity Sheet for Mathematics

Quarter 1

Week

4

GOVERNMENT PROPERTY
NOT FOR SALE

Learning Activity Sheet for Mathematics Grade 1

Quarter 1: Week 4

This material is intended exclusively for the use of teachers in the implementation of the MATATAG K to 10 Curriculum. It aims to assist in delivering the curriculum content, standards, and lesson competencies.

The Intellectual Property Code of the Philippines states that “No copyright shall subsist in any work of the Government of the Philippines. However, prior approval of the government agency or office wherein the work is created shall be necessary for exploitation of such work for profit. Such agency or office may, among other things, impose as a condition the payment of royalties.”

Borrowed materials (e.g., texts, illustrations, musical notations, photos, and other copyrightable, patentable contents) included in this learning resource are owned by their respective copyright and intellectual property right holders. Where applicable, DepEd has sought permission from these owners specifically for the development and printing of this learning resource. As such, using these materials in any form other than agreed framework requires another permission and/or licensing.

No part of this material, including its original and borrowed contents, may be reproduced in any form without written permission from the Department of Education.

Every care has been taken to ensure the accuracy of the information provided in this material. For inquiries or feedback, please call the Office of the Director of the Bureau of Learning Resources via telephone numbers (02) 8634-1072 and 8631-6922 or send an email to blr.od@deped.gov.ph.

The Department of Education would like to extend its sincere appreciation and gratitude to the United States Agency for International Development and RTI International through its ABC+ Project and UNICEF for supporting and providing technical assistance in the development of the MATATAG learning resources.

Published by the Department of Education
Secretary: Sara Z. Duterte
Undersecretary: Gina O. Gonong

Development Team

Writers:	Aida I. Yap and Dana M. Ong
Content Editors:	Melanie C. Unida and Marilyn E. Macababbad
Language Editors:	Ellen G. De la Cruz and Gemma B. Espadero
Illustrators:	Jason O. Villena and Cyrus T. Festijo
Layout Artists:	Armand Glenn S. Lapor and Cyrus T. Festijo

Management Team

Bureau of Curriculum Development
Bureau of Learning Delivery
Bureau of Learning Resources

Department of Education – Bureau of Learning Resources (DepEd- BLR)

Office Address: Ground Floor, Bonifacio Building, DepEd Complex
Meralco Avenue, Pasig City
Philippines 1600

Telefax: (02) 8634-1054; 8634-1072; 8631-4985

Email Address: blr.lrqad@deped.gov.ph; blr.lrpq@deped.gov.ph

Lesson Activity Sheet 1

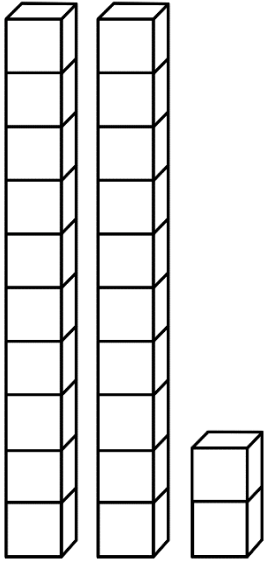
The Hundred Chart

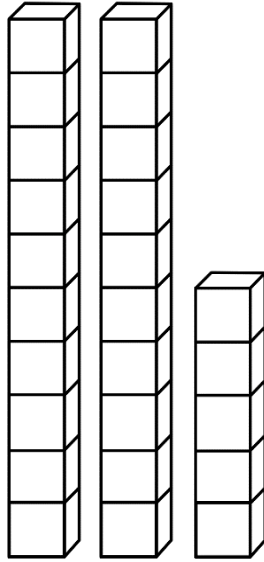
1	2	3	4	5	6	7	8	9	10
11	12	13	14	15	16	17	18	19	20
21	22	23	24	25	26	27	28	29	30
31	32	33	34	35	36	37	38	39	40
41	42	43	44	45	46	47	48	49	50

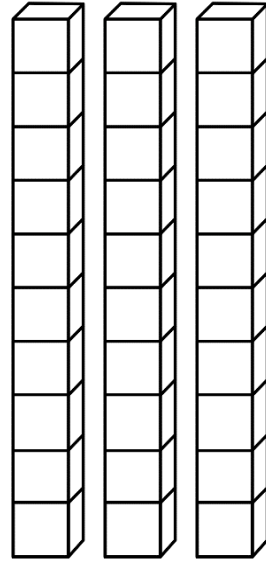
Assessment 1

Answer the following.

1. What number is represented by the longs and ones?
Write your answer on the blank.







2. Write the missing number or numbers in each square.

a.

19	20		22	23
-----------	-----------	--	-----------	-----------

b.

22	23	24		
-----------	-----------	-----------	--	--

c.

30	29	28	27	
-----------	-----------	-----------	-----------	--

d.

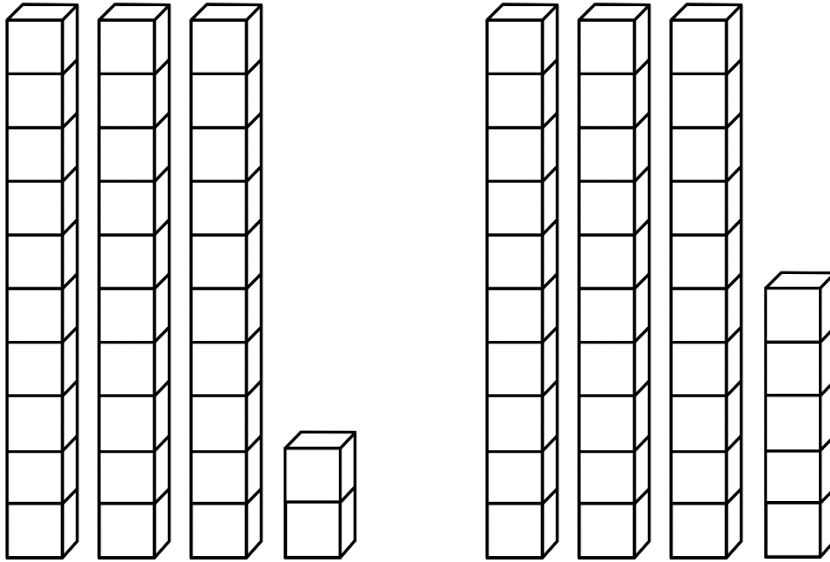
24	23			20
-----------	-----------	--	--	-----------

Assessment 2

Answer the following.

1. What number is represented by the longs and ones?

Write your answer on the blank.



2. a. What number is one less than 38? _____

b. What number is one more than 35? _____

c. What number is one less than 40? _____

Assessment 3

Each number below matches a letter of a message.
Re-arrange the position of numbers from 41 to 49 to show
the message. Write the message on the blank below.

M	A	O	V	I
46	47	43	44	41

H	E	T	L
49	45	48	42

Assessment 4

Complete the table by writing the missing numbers.

1	2	3	4	5	6	7	8	9	10
11	12	13	14	15	16	17	18	19	20
21	22	23	24	25	26	27	28	29	30
31	32	33	34	35	36	37	38	39	40
41	42	43	44	45	46	47	48	49	50
51	52	53	54		56	57	58	59	60
61	62		64	65	66	67	68	69	70
71	72	73	74	75	76	77		79	80
81	82	83	84	85		87	88	89	90
91	92	93	94	95	96	97	98	99	

Write the missing numbers.

One less than the given number	Given number	One more than the given number
	52	
	78	
	91	