

1

Learning Activity Sheet for Mathematics

Quarter 1

Week

5

GOVERNMENT PROPERTY
NOT FOR SALE

Learning Activity Sheet for Mathematics Grade 1

Quarter 1: Week 5

This material is intended exclusively for the use of teachers in the implementation of the MATATAG K to 10 Curriculum. It aims to assist in delivering the curriculum content, standards, and lesson competencies.

The Intellectual Property Code of the Philippines states that “No copyright shall subsist in any work of the Government of the Philippines. However, prior approval of the government agency or office wherein the work is created shall be necessary for exploitation of such work for profit. Such agency or office may, among other things, impose as a condition the payment of royalties.”

Borrowed materials (e.g., texts, illustrations, musical notations, photos, and other copyrightable, patentable contents) included in this learning resource are owned by their respective copyright and intellectual property right holders. Where applicable, DepEd has sought permission from these owners specifically for the development and printing of this learning resource. As such, using these materials in any form other than agreed framework requires another permission and/or licensing.

No part of this material, including its original and borrowed contents, may be reproduced in any form without written permission from the Department of Education.

Every care has been taken to ensure the accuracy of the information provided in this material. For inquiries or feedback, please call the Office of the Director of the Bureau of Learning Resources via telephone numbers (02) 8634-1072 and 8631-6922 or send an email to blr.od@deped.gov.ph.

The Department of Education would like to extend its sincere appreciation and gratitude to the United States Agency for International Development and RTI International through its ABC+ Project and UNICEF for supporting and providing technical assistance in the development of the MATATAG learning resources.

Published by the Department of Education
Secretary: Sara Z. Duterte
Undersecretary: Gina O. Gonong

Development Team

Writers:	Dana M. Ong and Aida I. Yap
Content Editors:	Melanie C. Unida and Marilyn E. Macababbad
Language Editors:	Ellen G. De la Cruz and Gemma B. Espadero
Illustrators:	Jason O. Villena and Cyrus T. Festijo
Layout Artists:	Armand Glenn S. Lapor and Cyrus T. Festijo

Management Team

Bureau of Curriculum Development
Bureau of Learning Delivery
Bureau of Learning Resources

Department of Education – Bureau of Learning Resources (DepEd- BLR)

Office Address: Ground Floor, Bonifacio Building, DepEd Complex
Meralco Avenue, Pasig City
Philippines 1600


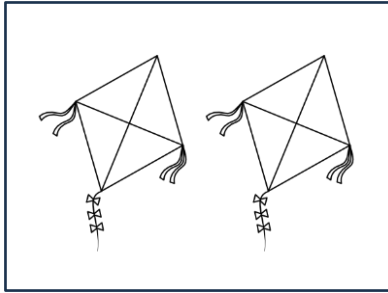
Telefax: (02) 8634-1054; 8634-1072; 8631-4985

Email Address: blr.lrqad@deped.gov.ph; blr.lrpd@deped.gov.ph

Assessment 1

Compare the given set of objects. Choose the letter of the phrase that should be written on the blank.

1.




The number of kites is _____ the number of balloons.

A. more than

B. less than

C. as many as

2.



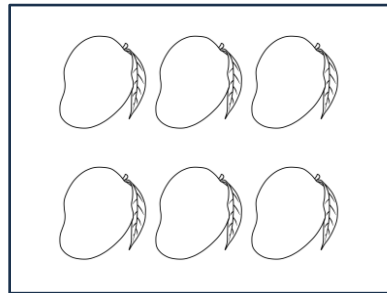

The number of girls is _____ the number of boys.

A. more than

B. less than

C. as many as

3.



The number of bananas is _____ the number of balloons.

A. more than

B. less than

C. as many as

Assessment 2

Encircle the letter of the correct answer.

1. Which number is greater than 10?

A. 9

B. 10

C. 11

2. Which number is the same as 16?

A. 61

B. 16

C. 6

3. Which number is less than 15?

A. 18

B. 15

C. 12

4. Which number is greater than 9 but less than 13?

A. 9

B. 12

C. 13

5. Which number is less than 17 but greater than 14?

A. 15

B. 17

C. 18

Assessment 3

Write the missing number on the blank.

1. **3, _____, 6**
 smallest largest

2. _____, **2, 5**
 smallest largest

3. **10, _____, 12**
 smallest largest

4. **17, _____, 14**
 largest smallest

5. _____, **19, 16**
 largest smallest

Assessment 4


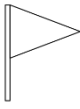




Do the following.

1. Draw what is asked.

a. a rectangle in the 3rd position

b. a circle in the 5th position

c. a triangle in the 9th position

1 st									10 th
									

2. Give what is asked.

a. Draw the object that is in the 4th position.

b. Draw the object that is in the 7th position.
