

4

# Learning Activity Sheet for Mathematics

Quarter 4

Lesson

8

**Worksheet for Mathematics Grade 4**  
**Quarter 4: Lesson 8 (Week 8)**  
**SY 2024-2025**

This material is intended exclusively for the use of teachers in the implementation of the MATATAG K to 10 Curriculum during the School Year 2024-2025. It aims to assist in delivering the curriculum content, standards, and lesson competencies. Any unauthorized reproduction, distribution, modification, or utilization of this material beyond the designated scope is strictly prohibited and may result in appropriate legal actions and disciplinary measures.

Borrowed content included in this material are owned by their respective copyright holders. Every effort has been made to locate and obtain permission to use these materials from their respective copyright owners. The publisher and development team do not represent nor claim ownership over them.

**Development Team**

**Writer:**

- Teresita C. Dalmacio (Malabon City National Science and Mathematics High School)

**Validator:**

- Lalaine Ann F. Manuel, Ph.D. (Central Luzon State University)

**Management Team**

Philippine Normal University  
Research Institute for Teacher Quality  
SiMERR National Research Centre

Every care has been taken to ensure the accuracy of the information provided in this material. For inquiries or feedback, please write or call the Office of the Director of the Bureau of Learning Resources via telephone numbers (02) 8634-1072 and 8631-6922 or by email at [blr.od@deped.gov.ph](mailto:blr.od@deped.gov.ph).

## LEARNING ACTIVITY SHEET

<b>Learning Area:</b>	Mathematics	<b>Quarter:</b>	4
<b>Lesson No.:</b>	8	<b>Date:</b>	
<b>Lesson Title/ Topic:</b>	Rounding decimal numbers to the nearest whole number and to the nearest tenth		
<b>Name:</b>		<b>Grade &amp; Section:</b>	

- I. Activity No. 1:** Match Me! (20 minutes)
- II. Objective(s):** At the end of the activity, you should be able to round decimal number to the nearest whole number and tenths.
- III. Materials Needed:** paper, pen, and worksheets
- IV. Instructions:** Draw an arrow to match each number when it is round off to the nearest tenths.

<p>7.9</p> <p>6.75</p> <p>8.75</p> <p>1.87</p> <p>5.35</p>	<table border="1" style="margin: auto;"> <tr><td>1</td></tr> <tr><td>2</td></tr> <tr><td>3</td></tr> <tr><td>4</td></tr> <tr><td>5</td></tr> <tr><td>6</td></tr> <tr><td>7</td></tr> <tr><td>8</td></tr> <tr><td>9</td></tr> <tr><td>10</td></tr> </table>	1	2	3	4	5	6	7	8	9	10	<p>3.85</p> <p>6.49</p> <p>9.89</p> <p>0.95</p> <p>3.42</p>
1												
2												
3												
4												
5												
6												
7												
8												
9												
10												

**LEARNING ACTIVITY SHEET**

<b>Learning Area:</b>	Mathematics	<b>Quarter:</b>	4
<b>Lesson No.:</b>	8	<b>Date:</b>	
<b>Lesson Title/ Topic:</b>	Rounding decimal numbers to the nearest whole number and to the nearest tenth		
<b>Name:</b>		<b>Grade &amp; Section:</b>	

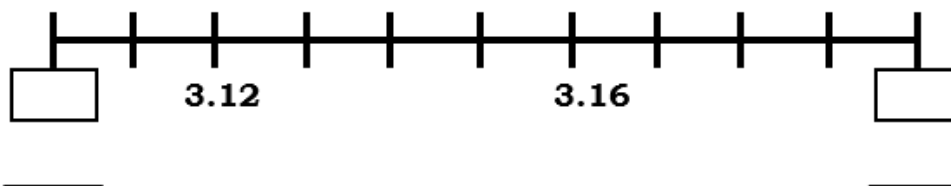
- I. Activity No. 2:** Complete me! (30 minutes)
- II. Objective(s):** At the end of the activity, you should be able to round decimal number to the nearest whole number and tenths.
- III. Materials Needed:** paper, pen, and worksheets
- IV. Instructions:**

A. Round the following to the nearest whole number.

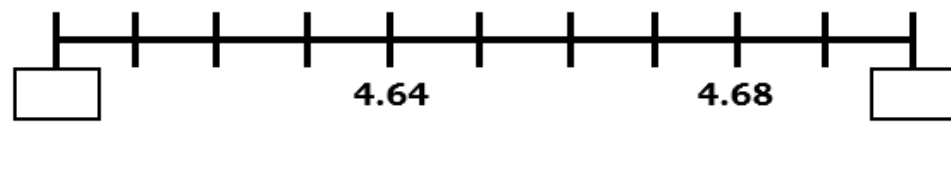
- |          |                      |           |                      |
|----------|----------------------|-----------|----------------------|
| 1. 9.2   | <input type="text"/> | 6. 8.2    | <input type="text"/> |
| 2. 0.8   | <input type="text"/> | 7. 11.3   | <input type="text"/> |
| 3. 14.6  | <input type="text"/> | 8. 25.07  | <input type="text"/> |
| 4. 36.45 | <input type="text"/> | 9. 72.89  | <input type="text"/> |
| 5. 95.89 | <input type="text"/> | 10. 0.726 | <input type="text"/> |

B. Complete the boxes below with tenths, and round if off to the nearest whole number.

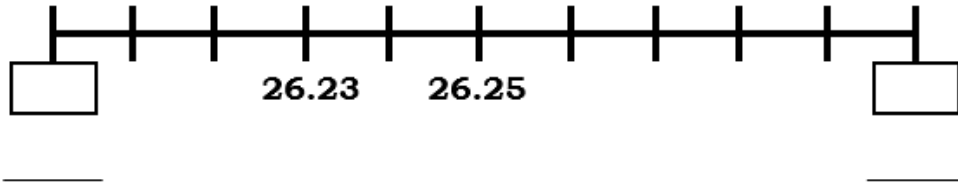
1.



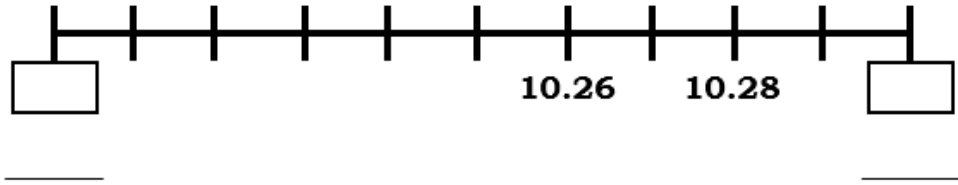
2.



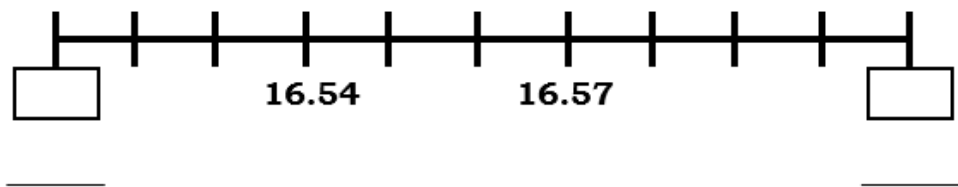
3.



4.



5.



## LEARNING ACTIVITY SHEET

<b>Learning Area:</b>	Mathematics	<b>Quarter:</b>	4
<b>Lesson No.:</b>	8	<b>Date:</b>	
<b>Lesson Title/ Topic:</b>	Rounding decimal numbers to the nearest whole number and to the nearest tenth		
<b>Name:</b>		<b>Grade &amp; Section:</b>	

- I. Activity No. 3:** Who am I? (30 minutes)
- II. Objective(s):** At the end of the activity, you should be able to round decimal number to the nearest whole number and tenths.
- III. Materials Needed:** paper, pen, and worksheets
- IV. Instructions:** Use the clues to find the correct answer from the six possibilities.

**1. Hints:**

- Less than a whole
- If you round me to the nearest whole, I round up.
- I have 2 decimal places.
- I am 0.7 when round off.

Who am I?

0.57	0.49	0.72
0.65	0.54	1.02

**2. Hints:**

- I am larger than 8.
- To the nearest whole number, I stay the same.
- I have 2 decimal places.
- My ones and tenths digits are both even.

Who am I?



8.37	8.24	9.7
9.68	9.24	10.6



**3. Hints:**

- If you round me to the nearest whole number, I stay the same.
- If you round me to the nearest tenths, I stay the same.
- My ones and tenths digit are odd.

*Who am I?*

14.53	12.78	13.71
11.36	14.26	15.32

**4. Hints:**

- I am an even number between 10 and 20.
- I round up when you round me to the nearest whole number.
- When you round me to the nearest tenths, I round up.

*Who am I?*



14.62	12.32	16.78
18.46	18.62	20.10