

1

Learning Activity Sheet for Mathematics

Quarter 3

Week

2

GOVERNMENT PROPERTY
NOT FOR SALE

Learning Activity Sheet for Mathematics Grade 1

Quarter 3: Week 2

This material is intended exclusively for the use of teachers in the implementation of the MATATAG K to 10 Curriculum. It aims to assist in delivering the curriculum content, standards, and lesson competencies.

The Intellectual Property Code of the Philippines states that “No copyright shall subsist in any work of the Government of the Philippines. However, prior approval of the government agency or office wherein the work is created shall be necessary for exploitation of such work for profit. Such agency or office may, among other things, impose as a condition the payment of royalties.”

Borrowed materials (e.g., texts, illustrations, musical notations, photos, and other copyrightable, patentable contents) included in this learning resource are owned by their respective copyright and intellectual property right holders. Where applicable, DepEd has sought permission from these owners specifically for the development and printing of this learning resource. As such, using these materials in any form other than agreed framework requires another permission and/or licensing.

No part of this material, including its original and borrowed contents, may be reproduced in any form without written permission from the Department of Education.

Every care has been taken to ensure the accuracy of the information provided in this material. For inquiries or feedback, please call the Office of the Director of the Bureau of Learning Resources via telephone numbers (02) 8634-1072 and 8631-6922 or send an email to blr.od@deped.gov.ph.

The Department of Education would like to extend its sincere appreciation and gratitude to the United States Agency for International Development and RTI International through its ABC+ Project and UNICEF for supporting and providing technical assistance in the development of the MATATAG learning resources.

Published by the Department of Education
Secretary: Sonny M. Angara
Undersecretary: Gina O. Gonong

Development Team

Writer:	UP NISMED (Aida I. Yap)
Content Reviewer:	Melanie C. Unida and Richie Noveloso
Language Evaluators:	Gemma B. Espadero and Ellen Dela Cruz
Illustrator:	Jason O. Villena
Layout Artist:	Lorraine Anne B. Ang

Management Team

Bureau of Curriculum Development
Bureau of Learning Delivery
Bureau of Learning Resources

Department of Education – Bureau of Learning Resources (DepEd- BLR)

Office Address: Ground Floor, Bonifacio Building, DepEd Complex
Meralco Avenue, Pasig City
Philippines 1600

Telefax: (02) 8634-1054; 8634-1072; 8631-4985

Email Address: blr.lrqad@deped.gov.ph; blr.lrpd@deped.gov.ph

Assessment 1

Twenty Grade 1 learners were interviewed about their favorite subjects. The results are shown in the table below:

Subject	Number of Learners
Language	7
Reading and Literacy	5
Mathematics	8

1. Construct a horizontal pictograph.

Favorite Subjects of Selected Grade 1 Learners


Subject	Number of Learners
Language	
Reading and Literacy	
Mathematics	

Key: 😊 = 1 learner

2. Construct a vertical pictograph.

Subject	Number of Learners
Language	7
Reading and Literacy	5
Mathematics	8

Favorite Subjects of Selected
Grade 1 Learners

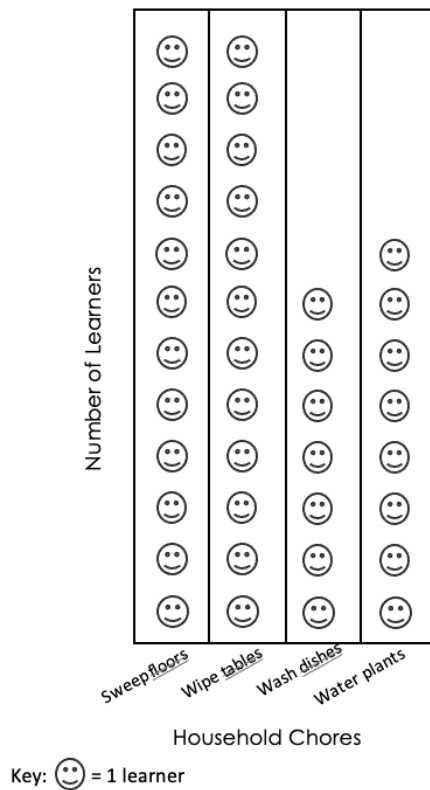


Key: ☺ = 1 learner

Assessment 2

Grade 1-Rose learners were asked to name just one household chore they do most frequently at home. The pictograph below shows the data collected.

Household Chores Grade 1-Rose Learners Do



Fill out the table below based on the pictograph above.








































Household Chores Grade 1 - Rose Learners Do


Household chores	Number of Learners
Sweep floors	
Wipe tables	
Wash dishes	
Water plants	

Assessment 3

The pictograph shows the favorite hobbies of Grade 1 – Rose learners.

Favorite Hobbies of Grade 1 – Rose Learners

Hobby	Number of learners
reading	    
watching TV	         
playing games	             
singing	         

Key:  = 1 learner

Read the following questions. Encircle the letter of your answer.

1. What hobby is most liked among Grade 1-Rose learners?

- A. reading
- B. watching TV
- C. playing games
- D. singing

2. What hobbies are equally liked among learners?


- A. watching TV and singing
- B. watching TV and playing games
- C. reading and playing games
- D. reading and singing

3. How many more learners like singing than reading?

- A. 10
- B. 5
- C. 4
- D. 0

Assessment 4

Based on the given pictograph, answer the following questions.



Encircle the letter of your answer.

- How many learners were born in July-September?
A. 9 B. 10 C. 12 D. 31
- In which months were there an equal number of learners born?
A. January-March and April-June
B. April-June and July-September
C. July-September and October-December
D. January-March and October-December
- How many more learners were born in July-September than in April-June?
A. 3 B. 2 C. 1 D. 0