

1

Learning Activity Sheet for Mathematics

Quarter 4

Week

3

GOVERNMENT PROPERTY
NOT FOR SALE

Learning Activity Sheet for Mathematics Grade 1

Quarter 4: Week 3

This material is intended exclusively for the use of teachers in the implementation of the MATATAG K to 10 Curriculum. It aims to assist in delivering the curriculum content, standards, and lesson competencies.

The Intellectual Property Code of the Philippines states that “No copyright shall subsist in any work of the Government of the Philippines. However, prior approval of the government agency or office wherein the work is created shall be necessary for exploitation of such work for profit. Such agency or office may, among other things, impose as a condition the payment of royalties.”

Borrowed materials (e.g., texts, illustrations, musical notations, photos, and other copyrightable, patentable contents) included in this learning resource are owned by their respective copyright and intellectual property right holders. Where applicable, DepEd has sought permission from these owners specifically for the development and printing of this learning resource. As such, using these materials in any form other than agreed framework requires another permission and/or licensing.

No part of this material, including its original and borrowed contents, may be reproduced in any form without written permission from the Department of Education.

Every care has been taken to ensure the accuracy of the information provided in this material. For inquiries or feedback, please call the Office of the Director of the Bureau of Learning Resources via telephone numbers (02) 8634-1072 and 8631-6922 or send an email to blr.od@deped.gov.ph.

The Department of Education would like to extend its sincere appreciation and gratitude to the United States Agency for International Development and RTI International through its ABC+ Project and UNICEF for supporting and providing technical assistance in the development of the MATATAG learning resources.

Published by the Department of Education
Secretary: Sonny M. Angara
Undersecretary: Gina O. Gonong

Development Team

Writer:	UP NISMED (Edna G. Callanta)
Content Reviewer:	Melanie C. Unida and Richie Noveloso
Language Evaluators:	Gemma B. Espadero
Illustrator:	Jason O. Villena
Layout Artist:	Lorraine Anne B. Ang

Management Team

Bureau of Curriculum Development
Bureau of Learning Delivery
Bureau of Learning Resources

Department of Education – Bureau of Learning Resources (DepEd- BLR)

Office Address: Ground Floor, Bonifacio Building, DepEd Complex
Meralco Avenue, Pasig City
Philippines 1600

Telefax: (02) 8634-1054; 8634-1072; 8631-4985

Email Address: blr.lrqad@deped.gov.ph; blr.lrpd@deped.gov.ph

Learning Activity Sheet 1

Philippine Peso Coins

Count how many of each coin you see in the group of coins below. Write your answer beside each coin's name. Number 1 has been done for you.

 7 1-peso coins

 10-peso coins

 5-peso coins

 20-peso coins



Learning Activity Sheet 2

Philippine Peso Bills

Count how many of each bill you see in the group of bills below. Write your answer beside each bill's name.

_____ 1. 20-peso bill



























































_____ 2. 50-peso bill

_____ 3. 100-peso bill



Learning Activity Sheet 3 Exchanging Coins







Circle the coins which can be exchanged for the given coin. There may be more than one correct answer. Number 1 has been done for you.

1. 	    	    	    
2. 	 	 	         
3. 	        		  
4. 	   	   	   

Learning Activity Sheet 4








Exchanging Coins and Bills

Mark with an **X** the coins or bills that can be exchanged for the given bills. There may be more than one correct answer. Number 1 has been done for you.

<p>1.</p> 	
<p>2.</p> 	
<p>3.</p> 	











Assessment 1

Write the value of each coin or bill using the symbol ₱.
Number 1 has been done for you.

1.		<u>₱1.00</u>
2.		<u> </u>
3.		<u> </u>
4.		<u> </u>
5.		<u> </u>
6.		<u> </u>
7.		<u> </u>

Assessment 2

Write the number of coins needed to exchange for the given coin or bill. Number 1 has been done for you.

<p>1.</p> <div style="text-align: center; margin-top: 20px;">  </div>	<div style="text-align: center; margin-top: 20px;"> <u> 5 </u>  </div>
<p>2.</p> <div style="text-align: center; margin-top: 20px;">  </div>	<div style="text-align: center; margin-top: 20px;"> <u> </u>  </div>
<p>3.</p> <div style="text-align: center; margin-top: 20px;">  </div>	<div style="text-align: center; margin-top: 20px;"> <u> </u>  </div>
<p>4.</p> <div style="text-align: center; margin-top: 20px;">  </div>	<div style="text-align: center; margin-top: 20px;"> <u> </u>  </div>
<p>5</p> <div style="text-align: center; margin-top: 20px;">  </div>	<div style="text-align: center; margin-top: 20px;"> <u> </u>  </div>